

NAME: _____

March
Morning Work #11



ER, IR, or UR

Write the letters for each picture.




.....

.....




INFERENCES

Read the sentence. What can you infer?
Janie was walking on the sidewalk. She didn't see the large orange cone.



ADJECTIVES

Color the ADJECTIVES below.



SHADES OF MEANING

Write the 2 other shades of meaning for each word.

stunned afraid speechless spooked

shocked

scared

EXPANDED FORM

Write the expanded form for each number.




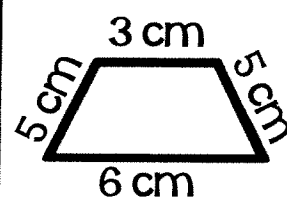
1. _____ + _____ + _____ + _____ = _____




2. _____ + _____ + _____ + _____ = _____

PERIMETER

What is the perimeter?



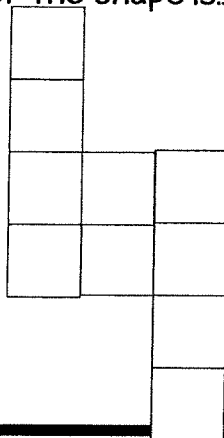
ADD.



AREA


The area of the shape is...

- (A) 7
- (B) 8
- (C) 9
- (D) 10




ORDERING NUMBERS


Number the smallest value to greatest value, by writing 1, 2, and 3.



400 + 30 + 8



45 tens 3 ones



384


NAME: _____

March
Morning Work #12 

SYLLIBICATION

Divide the words into the correct syllables.

plenty



silent

CONTRACTIONS


Write the contraction below.

would not 

HOMOPHONES

Write the correct word on the line.

She _____
pizza for lunch.





-ER and -EST ENDING

Complete the chart below.

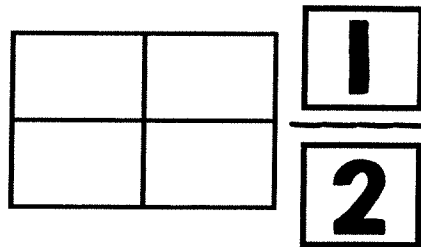
WORD	-ER	-EST
	kinder	
full		

Write 4 problems in each
shamrock to equal the number.



FRACTIONS


Color in to show the fraction.




PLACE VALUE

What's the value of the underlined digit?

8,173



SHOW \$1.86

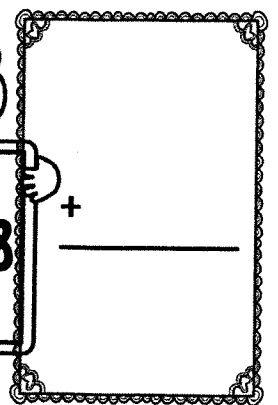


ADDITION

Rewrite, then solve.

527 + 638

+



NAME: _____

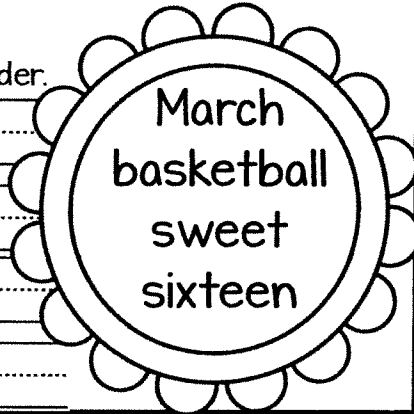
March
Morning Work #13



ABC ORDER

Write the words in ABC Order.

1. _____
2. _____
3. _____
4. _____



GRAMMAR SORT


Sort the words below.

juicy mother
create cuddly
water decide

nouns	verbs	adjectives

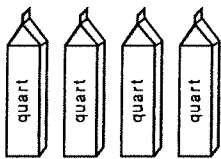
ANTONYMS

Write an antonym for each word below.

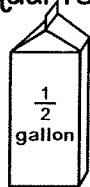


CAPACITY

Color in how many quarts =





=



DIFFERENCE

Solve the problem.



10 MORE, 10 LESS, 100 MORE 100 LESS

Complete the table.



NUMBER	10 less	10 more	100 less	100 more
748				
359				
207				

NAME: _____

March
Morning Work #14



BOGGLE

Use the letters to find words below. You can only make words with letters that are touching.

s	t	e	p
a	o	i	c
y	r	f	k
e	t	o	m

1.	2.	3.
4.	5.	6.
7.	8.	9.

IDIOMS

What does the idiom mean below?



HEAD IN THE CLOUDS


IRREGULAR VERBS

Complete the sentence below.

The child _____ to cry when he fell down.

SHAPES

I am made up of 2 circles.



CHECK YOUR ANSWER.


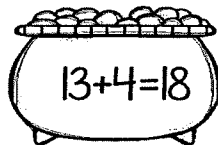

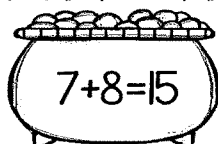

$\begin{array}{r} 63 \\ + 59 \\ \hline \end{array}$		$\begin{array}{r} - \\ \hline \end{array}$
---	--	--

True or False?

Use color code below.

TRUE: GREEN

FALSE: YELLOW



ARRAYS

Draw an array to represent the word problem.

I see 2 rows of 7 desks. How many desks do I see? Draw an array.


NAME: _____

March
Morning Work #15




MULTIPLE MEANING WORDS

Write a sentence for each picture below.



ship



WORD FAMILIES

Write 3 words in the "eat" family.

1. _____

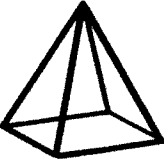
2. _____

3. _____

FIX THE SENTENCE.

the cat jumped over the high fence said Jane

3D SHAPES ~ FILL IN THE CHART.

shape	sides	vertices	edges
			

ESTIMATION

Write the estimation for each addend in the problem. Then solve.

$$\begin{array}{r} 45 \\ + 82 \\ \hline \end{array}$$



-100	#	+100
	258	
	753	
	192	
	864	

ADD.

$$\begin{array}{r} 752 \\ + 351 \\ \hline \end{array}$$


$$\begin{array}{r} 839 \\ + 147 \\ \hline \end{array}$$

NAME: _____

March
Morning Work #16

ER, IR, or UR

Write the letters for each picture.



.....

.....

INFERENCES






Read the sentence. What can you infer?

Take got up early and ate breakfast. Next, he grabbed his backpack on his way out.

ADJECTIVES

Color the ADJECTIVES below.



SHADES OF MEANING

Write the 2 other shades of meaning for each word.

nasty petite mini horrible

teeny		
awful		

EXPANDED FORM

Write the expanded form for each number.




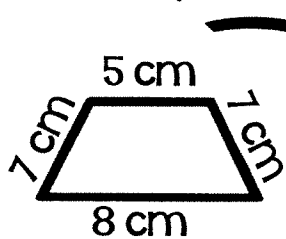
1. _____ + _____ + _____ + _____ = _____




2. _____ + _____ + _____ + _____ = _____

PERIMETER

What is the perimeter?



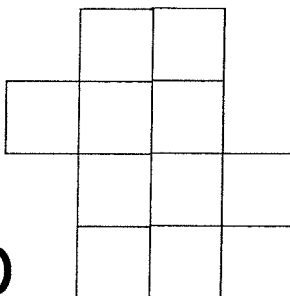
ADD.



AREA


The area of the shape is...

- (A) 7
- (B) 8
- (C) 9
- (D) 10




ORDERING NUMBERS


Number the smallest value to greatest value, by writing 1, 2, and 3.



68 tens 2 ones



286



600 + 80 + 3

NAME: _____


March
Morning Work #17



SYLLIBICATION

Divide the words into the correct syllables.

refill



napkin

CONTRACTIONS

Write the contraction below.

he would



HOMOPHONES

Write the correct word on the line.

The _____
ran into the
woods.




dear
deer

-ER and -EST ENDING

Complete the chart below.


WORD	-ER	-EST
quick		
full		

Write 4 problems in each
shamrock to equal the number.



FRACTIONS


Color in to show the fraction.




PLACE VALUE

What's the value of the underlined digit?

9,204



SHOW \$3.67



ADDITION

Rewrite, then solve.

$$487 + 695$$

+

NAME: _____


March
Morning Work #18



ABC ORDER

Write the words in ABC Order.

1. _____
2. _____
3. _____
4. _____



GRAMMAR SORT

Sort the words below.




gather table
raise shy
wide garden

nouns	verbs	adjectives

ANTONYMS

Write an antonym for each word below.


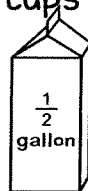


CAPACITY

Color in how many cups =

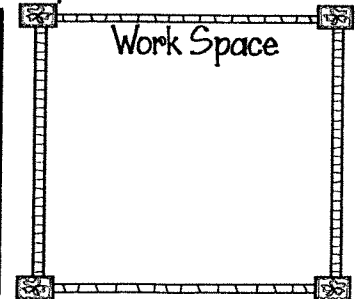
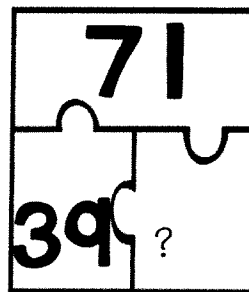


=



DIFFERENCE

Solve the problem.



10 MORE, 10 LESS, 100 MORE 100 LESS

Complete the table.



NUMBER	10 less	10 more	100 less	100 more
457				
362				
890				

NAME: _____

March
Morning Work #19



BOGGLE

Use the letters to find words below. You can only make words with letters that are touching.

p	l	e	s
a	o	o	c
y	b	r	k
e	t	e	a

- | | | |
|----|----|----|
| 1. | 2. | 3. |
| 4. | 5. | 6. |
| 7. | 8. | 9. |

IDIOMS

What does the idiom mean below?



HEAD IN THE CLOUDS


IRREGULAR VERBS

Complete the sentence below.
My sister _____ all
of the milk.

drank drinked


SHAPES

I have 1 flat side and I can roll.



CHECK YOUR ANSWER.

$$\begin{array}{r} 27 \\ + 74 \\ \hline \end{array}$$



True or False?

Use color code below.

TRUE: GREEN


FALSE: YELLOW

$$6+9=14$$

$$9+9=18$$

$$7+3=10$$

$$18+4=21$$



ARRAYS

Draw an array to represent the word problem.

I see 3 rows of 9 flowers. How many flowers do I see?

Draw an array.

NAME: _____

March
Morning Work #20




MULTIPLE MEANING WORDS

Write a sentence for each picture below.



wave



WORD FAMILIES

Write 3 words in the "urt" family.

1. _____

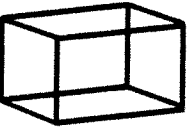
2. _____

3. _____

FIX THE SENTENCE.

i was born on March 18 2009


3D SHAPES ~ FILL IN THE CHART.

shape	sides	vertices	edges
			

ESTIMATION

Write the estimation for each addend in the problem. Then solve.

$$\begin{array}{r} 91 \text{ ---} \rightarrow \\ + 18 \text{ ---} \rightarrow + \\ \hline \end{array}$$



-100	#	+100
	428	
	739	
	621	
	809	

ADD.

$$\begin{array}{r} 428 \\ + 358 \\ \hline \end{array}$$

$$\begin{array}{r} 942 \\ + 638 \\ \hline \end{array}$$